



דְּמֵי כִּיס
 בשני הכיסים של _____ יש _____ שקלים
 כמה שקלים בכל כיס? ציירו וכתבו תרגיל מתאים.




$$\underline{\quad} + \underline{\quad} = ??$$

$$\underline{\quad} + \underline{\quad} = ??$$




$$\underline{\quad} + \underline{\quad} = ??$$

$$\underline{\quad} + \underline{\quad} = ??$$




$$\underline{\quad} + \underline{\quad} = ??$$

$$\underline{\quad} + \underline{\quad} = ??$$




$$\underline{\quad} + \underline{\quad} = ??$$

$$\underline{\quad} + \underline{\quad} = ??$$



$$\underline{\quad} + \underline{\quad} = ??$$

$$\underline{\quad} + \underline{\quad} = ??$$



$$\underline{\quad} + \underline{\quad} = ??$$

$$\underline{\quad} + \underline{\quad} = ??$$